



**2025 SATs
Information
Evening**

February 2025

Planting Dreams. Nurturing Hearts. Growing Minds.

When and What?

Mon 12 th May	Tue 13 th May	Wed 14 th May	Thu 15 th May
Punctuation and Grammar 45 minutes	English Reading 1 hour	Maths Arithmetic 30 minutes	Maths Reasoning 2 40 minutes
Spelling Approx 20mins		Maths Reasoning 1 40 minutes	

Those children who qualify for extra time will get an extra 25%.

Planting Dreams. Nurturing Hearts. Growing Minds.



How will the days look?

All tests take place in the morning.

We aim for children to have the opportunity to complete practice tests in conditions as close as possible to those of SATs week itself.

If appropriate, extra time and breaks will be organised.

In the afternoons, we do some revision for the following day.



Question Types in Punctuation and Grammar



3

Draw a line to match each **prefix** to the correct word to make a new word.

Prefix

en

de

dis

Word

cover

large

frost

45

Tick one box in each row to show if the statement about the **apostrophe** is **true** or **false**.

Sentence	The apostrophe shows that...	True	False
The boys' lunch was delicious.	there is only one boy.	<input type="checkbox"/>	<input type="checkbox"/>
Gina put out the cats' food.	there is more than one cat.	<input type="checkbox"/>	<input type="checkbox"/>
The girl's party is this afternoon.	there is more than one girl.	<input type="checkbox"/>	<input type="checkbox"/>
The trees' leaves were green.	there is only one tree.	<input type="checkbox"/>	<input type="checkbox"/>

9

Insert a **pair of commas** in the correct place in the sentence below.

The African elephant the largest land mammal in the world can weigh up to 6.6 tonnes.

46

Rewrite the sentence below in the **passive**. Remember to punctuate your answer correctly.

The children grew vegetables.

41

Insert a **hyphen** in the correct place in the sentence below.

We were very busy in the run up to the school play.

Question Types in Spelling



1. The children were _____ the objects from smallest to largest.
2. Do not show _____ to anyone.
3. I was given a _____ award.
4. We spent a _____ of hours at the shops.
5. You should _____ your fabric carefully.
6. The dust in the air made me _____.
7. Rosie used a sewing _____ to make her dress.
8. The spy used _____ ink to write his message.

Question Types in English Reading



The Parsnips

My Circus Life

A Traveller in Time

Reading Booklet

2022 key stage 2 English reading booklet

6 (a) **Find** and **copy one** word which shows that Yuri was not very careful when he put Veronika's bag down.

20 Look at page 9.

What does Vladik say that he and his daughter have in common?

Tick **one**.

They are brilliant jugglers.

They love to watch circus performances.

They are natural performers.

They like to run around instead of sitting still.

35 Think about the whole text.

How is a mysterious atmosphere created?

Give **two** ways, using evidence from the text to support your answer.

1. _____

2. _____

3 marks

Question Types in English Reading



2

What impression do you get of the Mars Rovers?

Give **two** impressions, using evidence from the text to support your answer.

P

E

1.

unreliable

Sometimes they don't work. One got its wheels stuck.

2.

slow

Spirit only covered 5 miles in six years.

3 marks

Question Types in Maths Arithmetic



16

$$2.12 \div 10 =$$

1 mark

30

$$80\% \text{ of } 115 =$$

1 mark

17

$$21 \overline{) 672}$$

Show
your
method

2 marks

31

$$\frac{2}{7} - \frac{1}{9} =$$

1 mark

Question Types in Maths Arithmetic



Level 1, 2 and 3 questions:

$$7 \times 35 =$$

$$2 \times 68 =$$

$$127 \times 1 =$$

$$902 \div 0 =$$

$$55\% \text{ of } 80 =$$

$$96 \div 4 =$$

$$1.1 + 0.564 =$$

$$2,040 \times 100 =$$

$$1/4 + 5/8 =$$

'Long' division



$$4128 \div 16 =$$

$$\begin{array}{r} 0258 \\ 16 \overline{) 41928} \end{array}$$

1	10 + 6	16
2	20 + 12	32

5	50 + 30	80
---	---------	----

6	60 + 36	96
---	---------	----

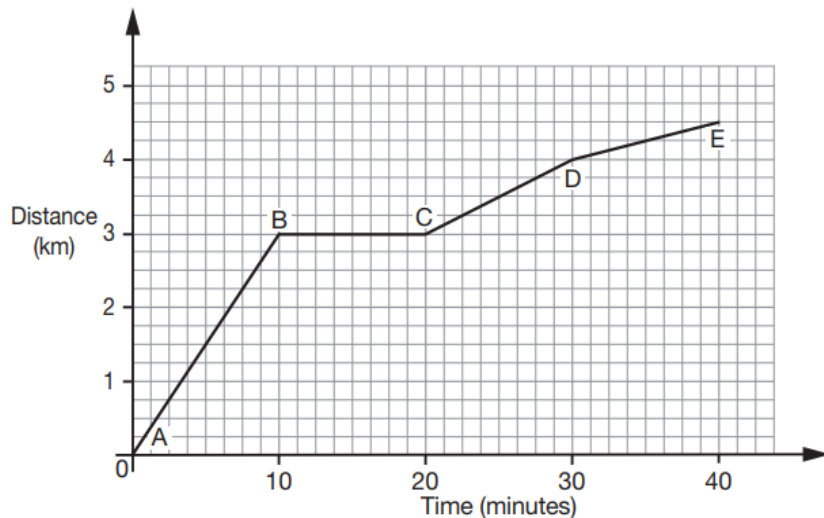
8	80 + 48	128
---	---------	-----

9	90 + 45	135
---	---------	-----

10	100 + 60	160
----	----------	-----

Question Types in Maths Reasoning

13 Look at the graph below that shows Dev's bike ride.



Match each part of Dev's journey to the correct sentence.

A to B

Dev rests for 10 minutes.

B to C

Dev cycles 1 km in 10 minutes.

C to D

Dev cycles 3 km in 10 minutes.

D to E

Dev cycles less than 1 km in 10 minutes.

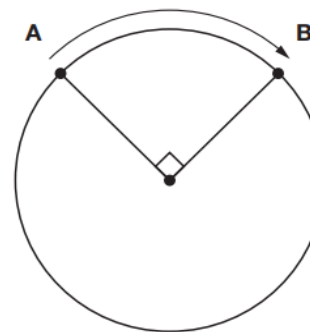
5 One tonne is 1,000 kilograms.

A truck can carry a load of 2.3 tonnes.

How many **kilograms** can the truck carry?

kg

19 The **circumference** of this circle is 60 centimetres.



Not
actual
size

What is the distance around the edge of the circle from **A** to **B**?

cm

Scores

Raw Scores

Children are given a raw score out of the total number of marks available for each test:

SPAG: out of 70 (combined over 2 papers)

English Reading: out of 50

Maths: out of 110 (combined over 3 papers)



Scores

Scaled Scores

Scaled scores work on a basis of a scale of 80 to 120 which fluctuates slightly each year depending on the difficulty of the test. This is decided by the DfE prior to the tests being delivered.

As the tests are of a similar standard each year, but questions differ, the government use a scaled score to also track attainment over time. They then calculate a national average from this.



Scores

Scaled Scores

N	80 – 99	100 – 109	110 – 120
A child has scored too few marks to register a SS	Working Towards the Expected Standard	Working at the Expected Standard	Exceeding the Expected Standard (Greater Depth)

2023 Raw/SS Equivalentents

SPAG = $36/70 = 100$ SS

Reading = $24/50 = 100$ SS

Maths = $56/110 = 100$ SS



Scores

Class teachers will share the results with the children privately in July. You will then receive your child's results in their end of year reports.

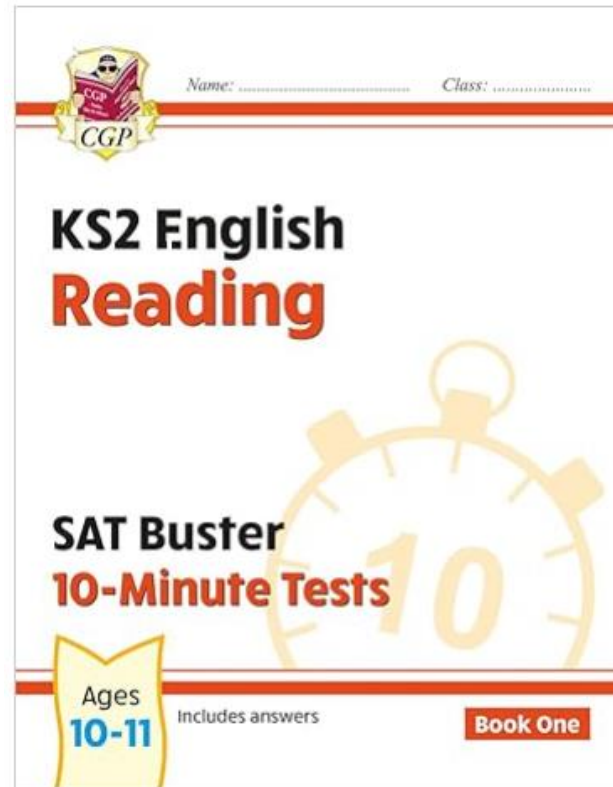
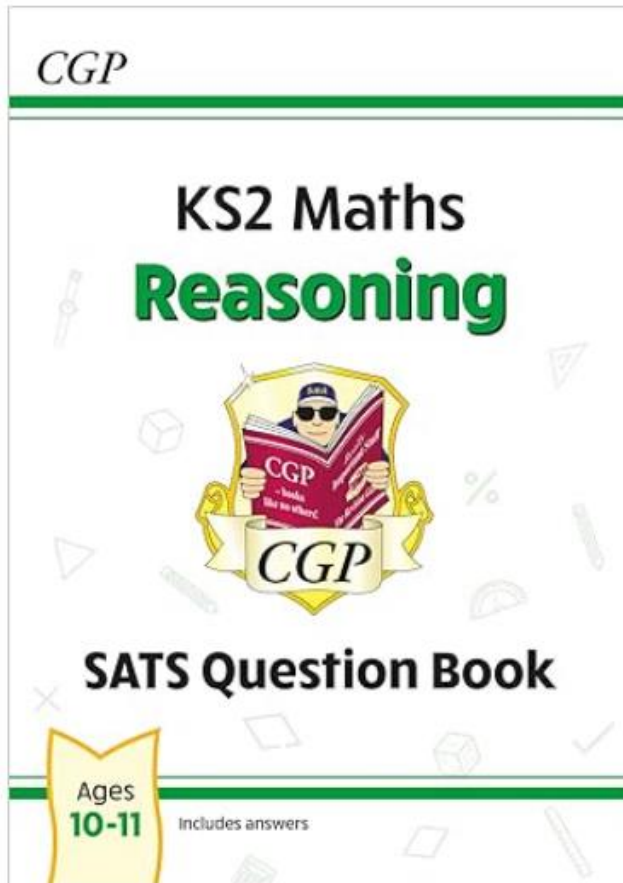
We receive the results a few weeks prior to this to allow time to contest any papers etc.

This information also goes up to their secondary schools which they can use to guide sets, particularly in Maths. However, children are usually tested in the first few weeks of Year 7.



CGP Books

The school has bought each child a Maths Reasoning and 10-minute Reading CGP book.



CGP Reading

Reading (10-Minute Tests)

Section	Date Due
Set A	Completed in school
Set B	Test 1 – Thursday 23 rd January Test 2 – Thursday 30 th January Test 3 – Thursday 6 th February Test 4 – Thursday 13 th February Test 5 – Thursday 27 th February Test 6 – Thursday 6 th March
Set C	Test 1 – Thursday 13 th March Test 2 – Thursday 20 th March Test 3 – Thursday 27 th March Test 4 – Thursday 3 rd April Tests 5 and 6 - Thursday 24 th April (One practice test per week during the Easter holidays)



CGP Maths Reasoning



Maths Reasoning

Section Three <i>Fractions, Decimals and Percentages</i>	P16 – Fractions P17 – Comparing Fractions P18 – Adding and subtracting fractions	Thursday 27 th February
	P19 – Multiplying and Dividing Fractions P20 – Fractions, Decimals and Percentages P21 – Mixed Practice	Thursday 6 th March
Section Four <i>Ratio, Proportion and Algebra</i>	P22 – Ratio, Proportion and Unequal Sharing P24 – Percentage Problems	Thursday 13 th March
	P25 – Formulas and Combinations P26 – Finding Missing Numbers P27 – Number Sequences	Thursday 20 th March
Section Five <i>Measurement</i>	P29 – Units and Conversion P30 – Time P31 – Money	Thursday 27 th March
	P32 – Perimeter and Area P34 – Volume P35 – Mixed Practice (Optional)	Thursday 3 rd April

Over the Easter Break

If you wish to buy your child any additional CGP books as a lovely Easter gift they are available from the WHSmiths or Amazon!



Year 6 SATS



Please refrain from using previous years' SATs tests at home as we use these for practice tests in school. These CGP books are a great substitute!



Any Questions?

**Planting Dreams.
Nurturing Hearts.
Growing Minds.**

